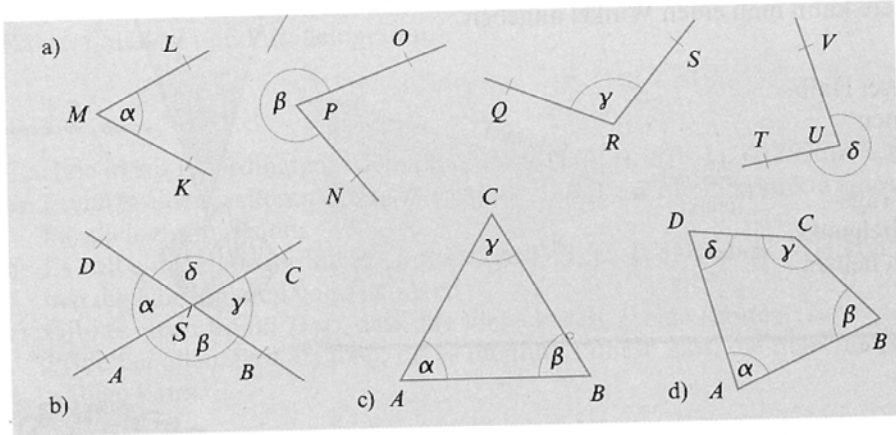


3^L

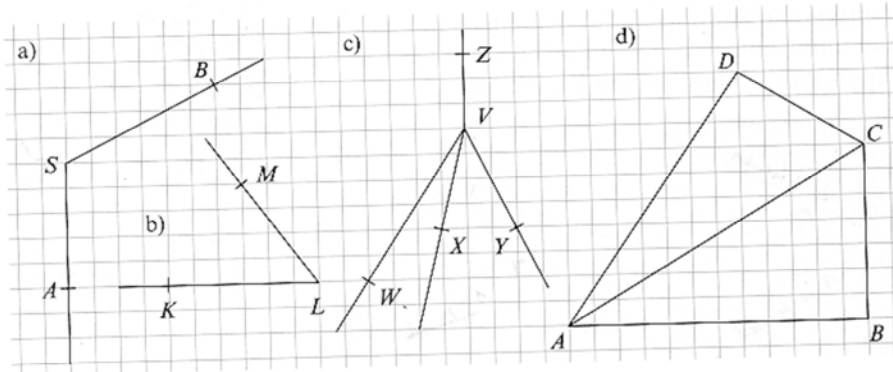
Gib die gekennzeichneten Winkel mithilfe von Punkten an.



4

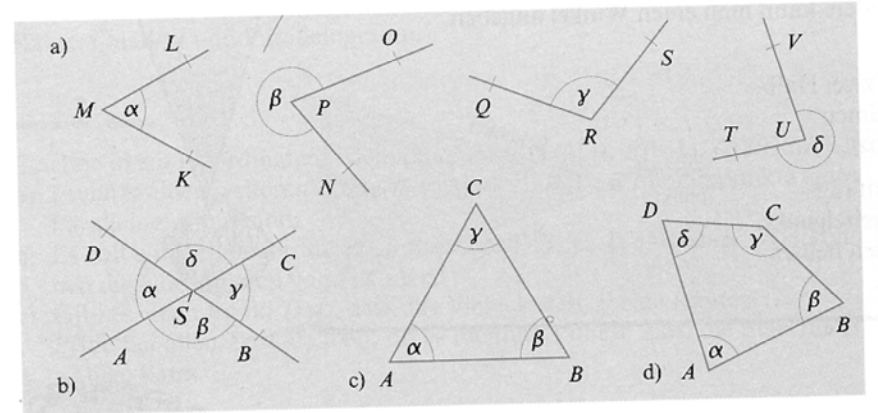
Übertrage die Figuren in dein Heft und kennzeichne die Winkel α, β, \dots

- a) $\alpha = \sphericalangle ASB, \beta = \sphericalangle BSA$ b) $\alpha = \sphericalangle KLM, \beta = \sphericalangle MLK$
 c) $\alpha = \sphericalangle YVZ, \beta = \sphericalangle WVX, \gamma = \sphericalangle XVY, \delta = \sphericalangle ZVW, \epsilon = \sphericalangle WVY$
 d) $\alpha = \sphericalangle BAC, \beta = \sphericalangle CAD, \gamma = \sphericalangle CBA, \delta = \sphericalangle ADC, \epsilon = \sphericalangle DCB$



3^L

Gib die gekennzeichneten Winkel mithilfe von Punkten an.



4

Übertrage die Figuren in dein Heft und kennzeichne die Winkel α, β, \dots

- a) $\alpha = \sphericalangle ASB, \beta = \sphericalangle BSA$ b) $\alpha = \sphericalangle KLM, \beta = \sphericalangle MLK$
 c) $\alpha = \sphericalangle YVZ, \beta = \sphericalangle WVX, \gamma = \sphericalangle XVY, \delta = \sphericalangle ZVW, \epsilon = \sphericalangle WVY$
 d) $\alpha = \sphericalangle BAC, \beta = \sphericalangle CAD, \gamma = \sphericalangle CBA, \delta = \sphericalangle ADC, \epsilon = \sphericalangle DCB$

